


Grocery Store Word Problems




Directions: Read the question and write your answer below

1. You were given \$10.00 to spend on fruits and vegetables at the store. You spent \$2.78 on pears and \$1.56 on apples. How much money will you have left for the rest of the week? **Show your work here:**


2. The vegetable platter **A** for the party costs \$15.00. Vegetable platter **B** costs 2 times as much. You have \$60.00. How many **A** platters can you buy? How many **B** platters?

of platters Vegetable Platter **A** =
Show your work here:

of platters for Vegetable Platter **B** =
Show your work here:



Grocery Store Word Problems



3. Answer the questions below on the spaces provided:

Group 1  = 2

Group 2  = 4


Group 3  = 6

Group 4  = 8


Group 5  = 10

Add the number of apples in Groups 1,2,3,4,5 = _____

Is the answer in a odd or even? _____

You need 10 groups of . Finish the sequence below. The first one is done for you. (Hint: What is the pattern from Group 1-5?)

Group 6  = 12

Group 7  =

